

Name: _____

Roll No. _____

SIDDEEQ PUBLIC SCHOOL

ENTRY TEST ... 47 MATHEMATICS Max. Marks: 20 ADMISSION to GRADE: 5

Checked by	Srv #	Sign:	Rechecked by	Srv #	Sign:	Marks:
------------	-------	-------	--------------	-------	-------	--------

1. Complete the following mathematical statements. (1.0 × 4)

- i) $2 \times 3 \times 7$ is the prime factorization of _____
- ii) Fatima finished baking for a get together at **4:30** pm. She took **2 hours 35 minutes** to bake. She started baking at _____
- iii) $816 \times \underline{\hspace{2cm}} = 816\ 000$
- iv) $2 \div \frac{1}{4}$ _____ one quarter of 2 (insert: > or <)

q2. Do as directed. (2.0×2)

(i) Find the LCM of 27 and 54

(ii) Find the difference of 524.5cm and 280.75cm

3. Solve the following. (2.0×2)

(i) $2\frac{1}{7} + \frac{5}{14} + \frac{17}{14}$
(Give your answer in lowest form)

(ii) $250.91 \div 12$

4. Tehzeeb bakers sold 2 315 biscuits on Eid and had 279 biscuits left. How many biscuits did they have at first? (4.0)

5. A sugar bag contains 30kg of sugar. The chef used $\frac{2}{3}$ of sugar for 3 different sweet dishes. Find

(a) How much sugar is used for making 3 sweet dishes?

(b) How much sugar is left in the bag?

(4.0)

(Use back of the sheet for Q5)

Name: _____

Roll No. _____

SIDDEEQ PUBLIC SCHOOL

ENTRY TEST ... 47

SCIENCE

Max. Marks: 10

ADMISSION to GRADE: 5

Checked by	Srv #	Sign:	Rechecked by	Srv #	Sign:	Marks:
------------	-------	-------	--------------	-------	-------	--------

Objective

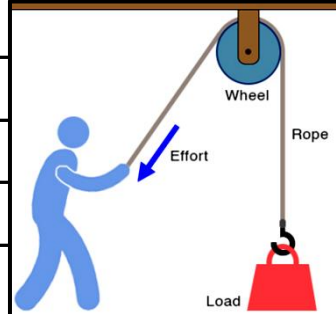
- Q.1 Fill in the blanks.** (1.0×4)
- (i) The group of living things which obtain their food from other living things are called _____.
 - (ii) The force of attraction between the particles of _____ is weaker than in solids.
 - (iii) _____ energy always travels from a hot object to a cold object.
 - (iv) Solar energy is a _____ resource and natural gas is a _____ resource.

Short-Answer Questions (Best three will be considered.) (2.0×3)

- Q.2 Answer the following questions.**
- (i) **Explain one advantage and one disadvantage of friction using examples.**
 Advantage: _____

 Disadvantage: _____

 - (ii) **Describe in simple words how lifting a load becomes easier with a pulley.**





(iii) **Differentiate between:**

CONTAGIOUS DISEASES	NON-CONTAGIOUS DISEASES
<i>Difference</i>	
<i>Examples</i>	

- (iv) a) **What is the function of heart in our body?**

b) Encircle the flowering plants in the following figures.



Name: _____

Roll No. _____

SIDDEEQ PUBLIC SCHOOL

ENTRY TEST ... 47

ENGLISH

ADMISSION to GRADE: 5

Checked by (Service # & Initials)	Rechecked by (Service # & Initials)	Max. Marks	Marks Secured
		20	

Vocabulary

Q.1 (A) Encircle the Correct Spellings. (0.5x2)

- temperature / temparature / tamperature / tamparature
- serprise / surpsrie / surprise / surpirse

(B) Provide Meanings either in English or in Urdu. (0.5x4)

- gather _____
- valuable _____
- benefit _____
- select _____

(C) Complete the Columns. (0.5x6)

Words	Opposites
borrow	
freeze	

Present	Past	Past Participle
buy		
	flew	

Grammar

Q.2 Fill in the Blanks with suitable Articles and Prepositions. (0.5x4)

My brother _____ young scuba diver jumped _____ the river to save _____ child _____ drowning.

Q.3 (A) Complete each Sentence by Choosing the Correct Word. (1.0x3)

- The baby _____ crying for milk now. (is / has / was)
- The shopkeeper _____ an expensive vase. (sell / sold / selling)
- They _____ not do their work regularly. (does / do / are)

(B) Do as Directed. (1.0x3)

- Jelly usually sets in an hour. (Change into an Interrogative Sentence)

- The boss is visiting a picture gallery. (Change into a Plural Sentence)

- They did not kept us waiting. (Correct the Sentence)

Q.4 Identify the Part of Speech of the Underlined Words. (1.0x3)

- What are you doing there? _____
- Masons build houses. _____
- That was a difficult question. _____

Sentence Construction

Q.5 Make meaningful Sentences of these Words. (1.0x3)

- possible: _____
- admit: _____
- hurriedly: _____